



UNIVERSITY OF CAMBRIDGE INTERNATIONAL EXAMINATIONS
International General Certificate of Secondary Education

www.PapaCambridge.com

PHYSICAL SCIENCE

0652/12

Paper 1 Multiple Choice

October/November 2011

45 minutes

Additional Materials: Multiple Choice Answer Sheet
Soft clean eraser
Soft pencil (type B or HB is recommended)

* 3 7 4 5 5 0 5 1 2 8 *

READ THESE INSTRUCTIONS FIRST

Write in soft pencil.

Do not use staples, paper clips, highlighters, glue or correction fluid.

Write your name, Centre number and candidate number on the Answer Sheet in the spaces provided unless this has been done for you.

There are **forty** questions on this paper. Answer **all** questions. For each question there are four possible answers **A, B, C** and **D**.

Choose the **one** you consider correct and record your choice in **soft pencil** on the separate Answer Sheet.

Read the instructions on the Answer Sheet very carefully.

Each correct answer will score one mark. A mark will not be deducted for a wrong answer.

Any rough working should be done in this booklet.

A copy of the Periodic Table is printed on page 20.

This document consists of **19** printed pages and **1** blank page.



- 1 The following statements are about covalent bonding.

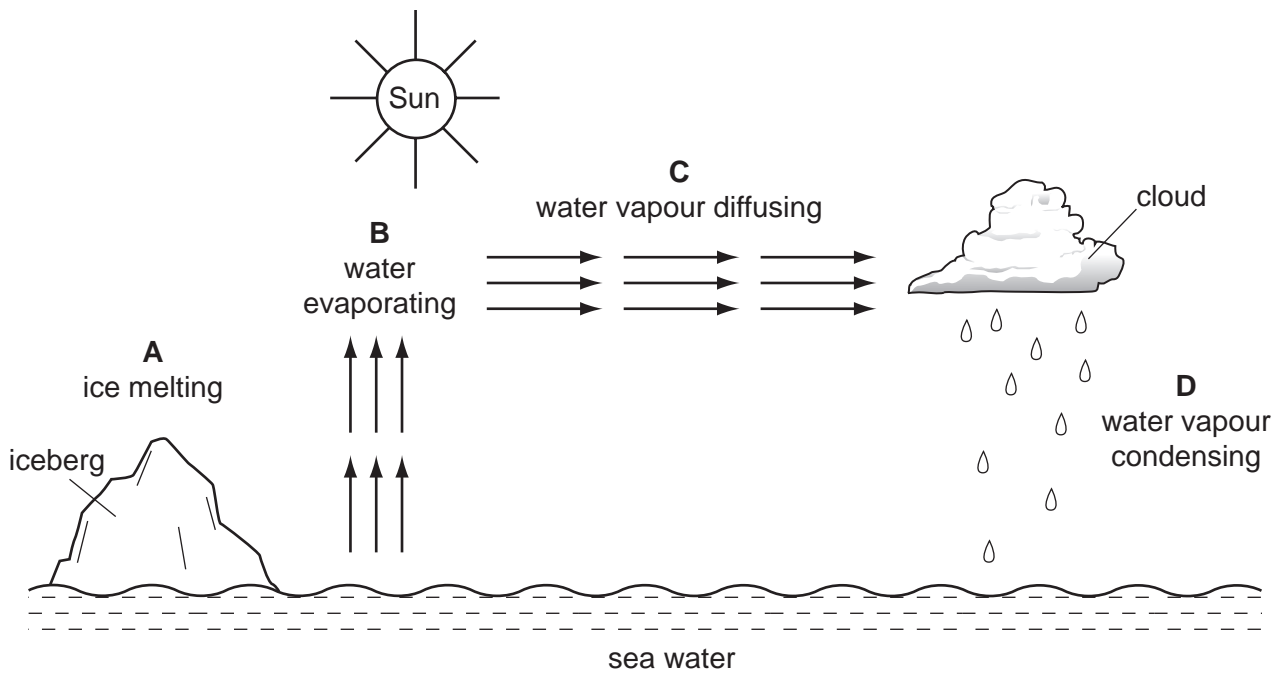
Covalent bonds are formed by the1..... of electrons.

Covalent substances have2..... electrical conductivity.

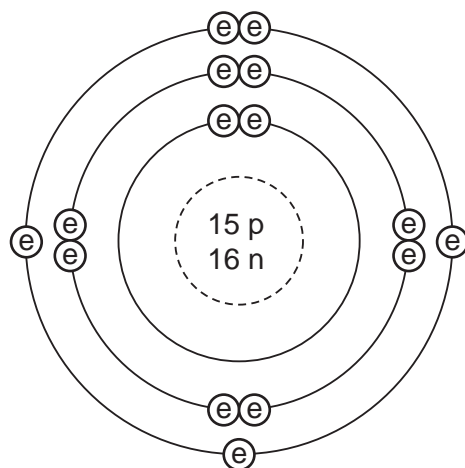
Which words correctly complete gaps 1 and 2?

	1	2
A	sharing	high
B	sharing	low
C	transfer	high
D	transfer	low

- 2 In which process is heat energy neither given out nor taken in?



- 3 The diagram shows the structure of an atom.



key

e = electron

n = neutron

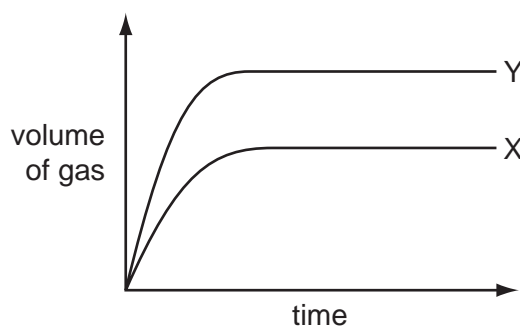
p = proton

What are the nucleon number and proton number of the atom?

	nucleon number	proton number
A	15	30
B	16	31
C	31	15
D	31	16

- 4 A student reacts 10 cm^3 of hydrochloric acid with two large lumps of calcium carbonate. The calcium carbonate is in excess. He measures the rate of reaction by collecting the gas given off and measuring the volume every fifteen seconds.

The results are shown by curve X in the graph.



Which change to the experiment would give the curve Y?

- A** Heat the acid before adding it.
- B** Use 10 cm^3 of more concentrated acid.
- C** Use larger pieces of calcium carbonate.
- D** Use twice as much acid of the same concentration.

- 5 The diagram shows wood burning in air.



Which two words describe what happens to the wood and the type of reaction taking place?

	wood is	type of reaction
A	oxidised	endothermic
B	oxidised	exothermic
C	reduced	endothermic
D	reduced	exothermic

- 6 Ethyl ethanoate has the formula $\text{CH}_3\text{CO}_2\text{C}_2\text{H}_5$.

What is the relative molecular mass M_r of this compound?

- A** 48 **B** 72 **C** 88 **D** 124

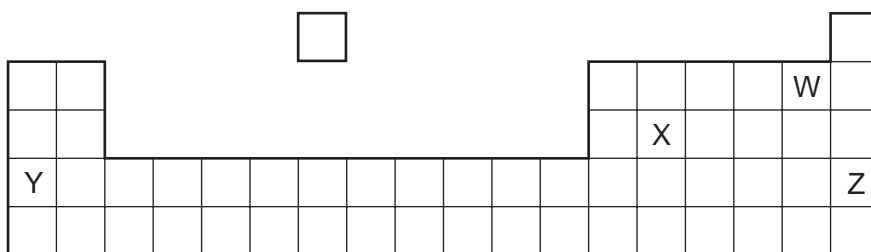
- 7 Which can be used to show that a gas is ammonia?

A **B** **C** **D**

limewater flame moist litmus paper glowing

splint splint

- 8 What must be formed when an acid reacts with a base?
- A carbon dioxide
B hydrogen
C oxygen
D a salt
- 9 Which gas is produced when sodium carbonate reacts with hydrochloric acid?
- A carbon dioxide
B chlorine
C hydrogen
D oxygen
- 10 The diagram shows an outline of part of the Periodic Table.



Which two elements could form a covalent compound?

- A W and X B W and Y C X and Y D X and Z
- 11 The element technetium, Tc (proton number 43), does not exist in nature.
- From its position in the Periodic Table, which description of technetium is most likely to be correct?
- A It is a brittle solid of low melting point.
B It is a metal with a high melting point.
C It is a soft, very reactive metal.
D It is an unreactive gas.

- 12 The following statements are about rubidium, which is below potassium in Group I of the Periodic Table.

The melting point of rubidium is1..... than that of potassium.

The reaction of rubidium with water is2..... than that of potassium.

Which words correctly complete gaps 1 and 2?

	1	2
A	higher	faster
B	higher	slower
C	lower	faster
D	lower	slower

- 13 **A**, **B**, **C** and **D** are the properties of four metals produced from iron ore.

Which properties are most suitable for making cutlery?

- A** brittle and hard
 - B** easily shaped and soft
 - C** malleable and rusts
 - D** resists corrosion and hard
- 14 Metal M is only present in its ores as a compound.
- M is extracted from these compounds by heating them with carbon.
- In which position in the reactivity series shown is M most likely to be found?

potassium

A

sodium

calcium

B

magnesium

zinc

C

iron

copper

D

15 Which statements about water are correct?

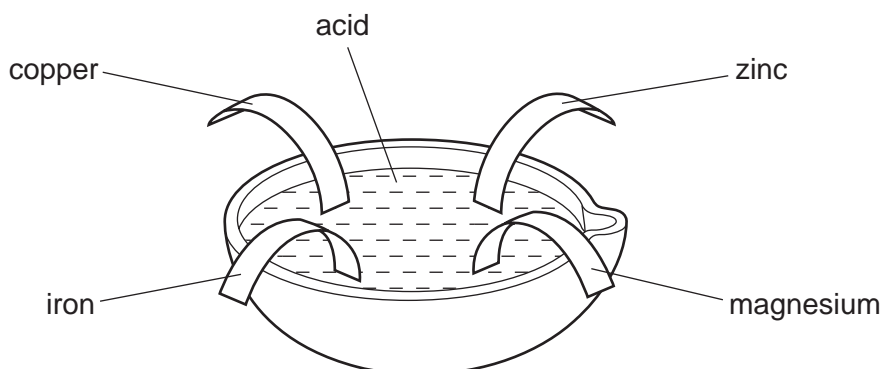
- 1 Water can be used as a solvent.
- 2 Water can be used to prevent iron from rusting.
- 3 Water is a compound that contains two parts of oxygen to one part of hydrogen.

A 1 only **B** 2 only **C** 1 and 3 **D** 2 and 3

16 Which gases are released into the air from burning coal?

	carbon monoxide	carbon dioxide	sulfur dioxide
A	✓	✓	✓
B	✓	✓	x
C	✓	x	✓
D	x	✓	x

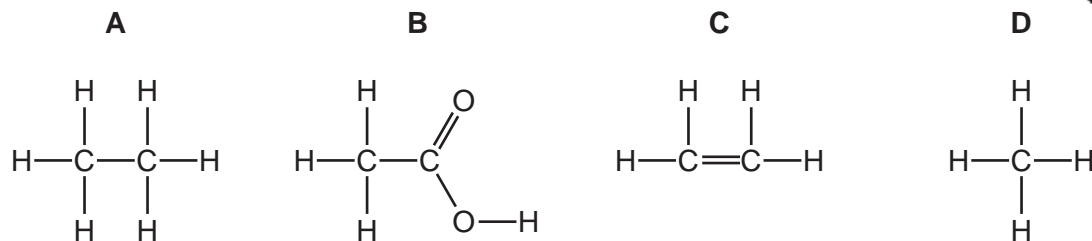
17 Four different metals were placed in dilute hydrochloric acid.



Which metal would **not** react?

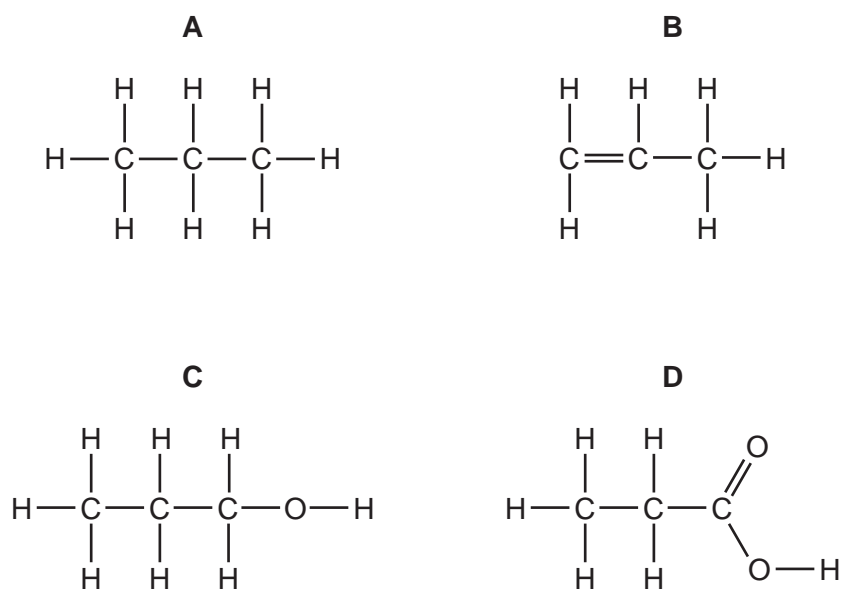
- A** copper
B iron
C magnesium
D zinc

18 Which structure represents an unsaturated hydrocarbon?

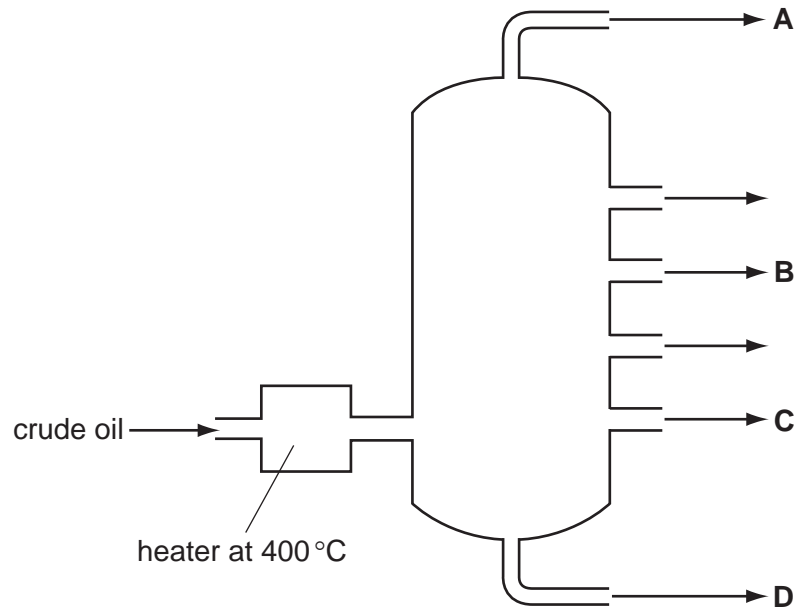


19 Propene, C_3H_6 , follows ethene in the alkene homologous series.

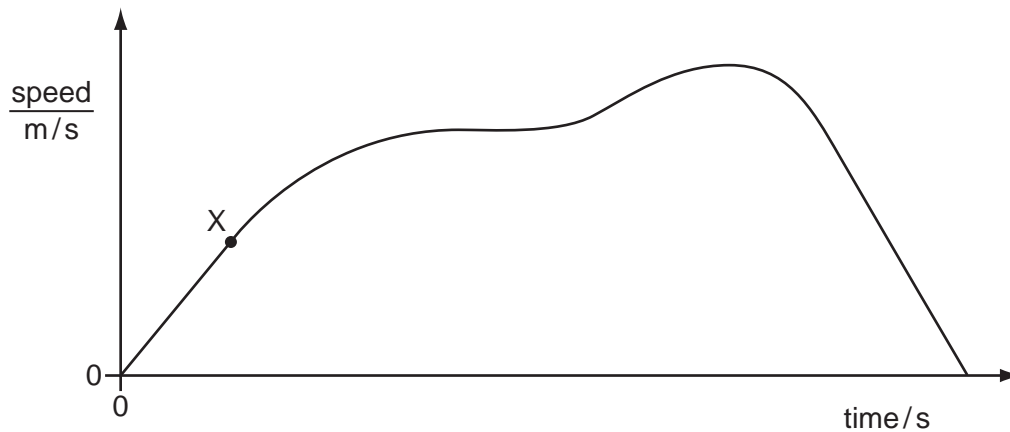
Which molecule could be made by the catalytic addition of steam to propene?



- 20 The diagram represents an apparatus used in the fractional distillation of crude oil.
From which position is methane obtained?



- 21 The diagram shows the change in speed of a car with time.



Which is the correct description of the motion of the car at point X?

- A It is moving at a constant speed.
- B It is moving at a decreasing speed.
- C It is moving at an increasing speed.
- D It is not moving.

- 22 A stopwatch is used to time a runner in a race. The diagrams show the stopwatch at the start of the last lap and at the end of the last lap.



start of last lap



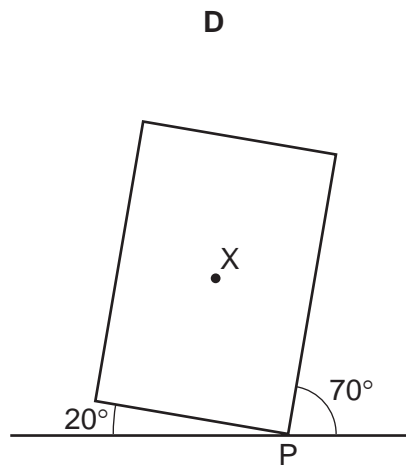
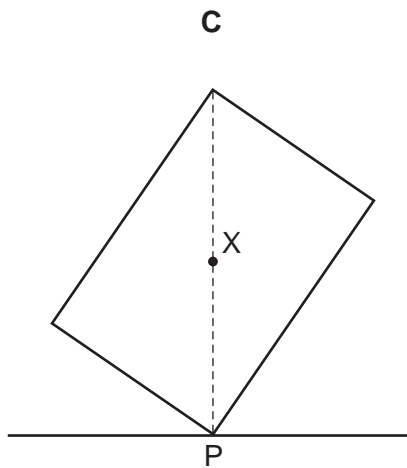
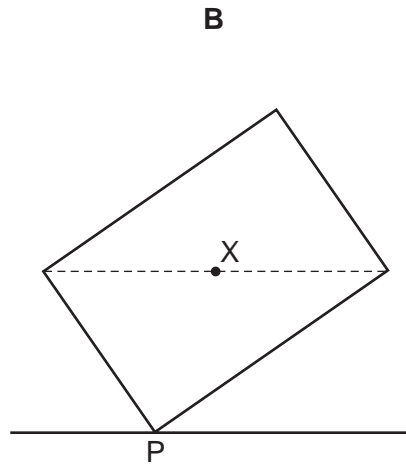
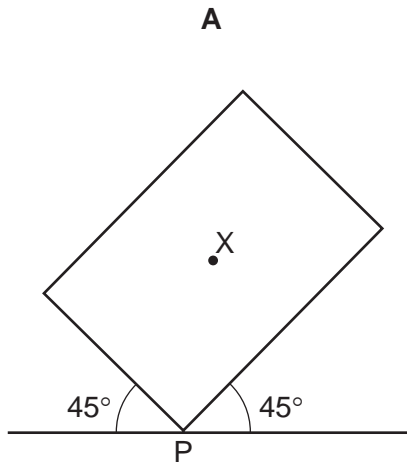
end of last lap

How long did the runner take to finish the last lap of the race?


- A 50.00 seconds
- B 50.10 seconds
- C 100.00 seconds
- D 100.10 seconds

23 A plane lamina with centre of mass X touches the ground at point P.

Which diagram shows the lamina in equilibrium?

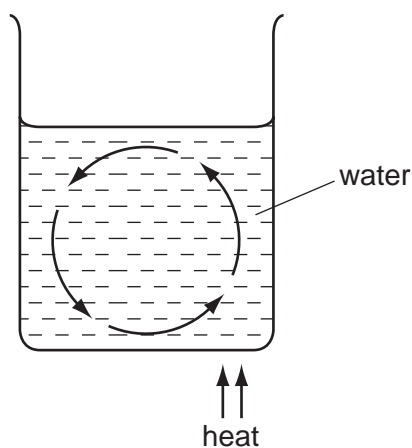


- 24 Two blocks X and Y are placed on a uniform beam. The beam balances on a pivot as shown.



What does this show about X and Y?

- A They have the same mass and the same density.
 - B They have the same mass and the same weight.
 - C They have the same volume and the same density.
 - D They have the same volume and the same weight.
- 25 The diagram shows a convection current in water in a beaker.



Which property of the water is changing and causing the convection current?

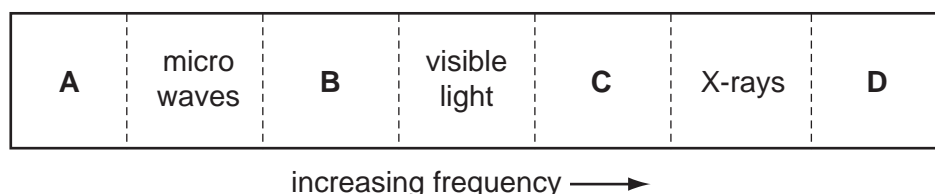
- A boiling point
- B density
- C mass
- D surface area

- 26 A coal-fired power station generates electricity. Coal is burnt and the energy released boils water. The steam from the water makes the generator move and this produces electricity.

Which forms of energy are involved in this process?

- A chemical, heat, hydroelectric, electrical
 B chemical, heat, kinetic, electrical
 C geothermal, heat, kinetic, electrical
 D geothermal, kinetic, hydroelectric, electrical
- 27 Which physical property **cannot** be used for temperature measurement?
- A activity of a radioactive source
 B electrical resistance of a solid
 C pressure of a gas
 D volume of a liquid
- 28 The diagram shows the spectrum of electromagnetic waves.

Which labelled region represents radio waves?



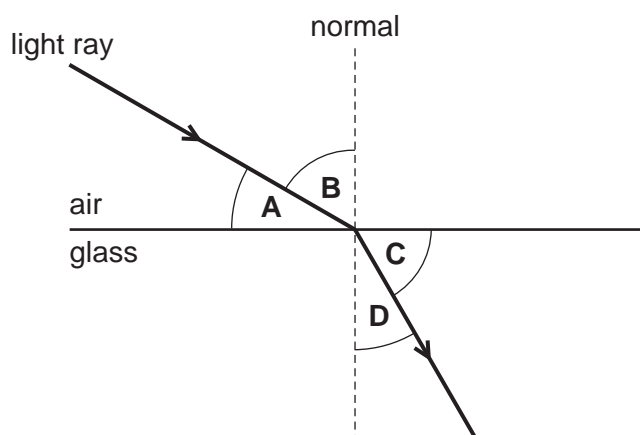
- 29 Waves hit the edge of a lake, one every 2.0 seconds. The distance between one wave crest and the next is 0.5 metres.

What are the frequency and the wavelength of the waves?

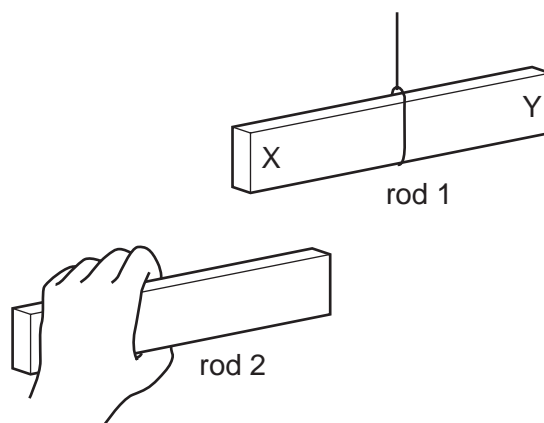
	frequency / Hz	wavelength / m
A	0.5	0.5
B	0.5	2.0
C	2.0	0.5
D	2.0	2.0

30 A light ray passes from air into glass.

Which labelled angle is the angle of refraction?



31 Two plastic rods, 1 and 2, are negatively charged. Rod 1 hangs freely.

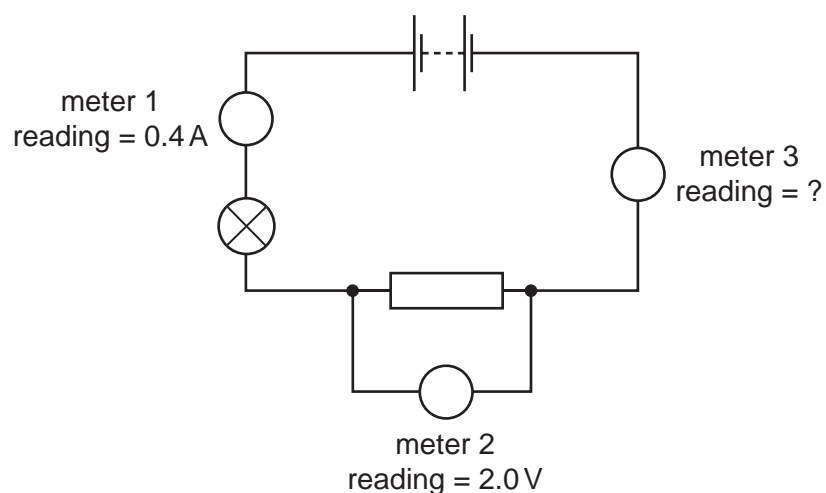


Rod 2 is brought near to end X of rod 1 and then near to end Y of rod 1.

What happens to the rods in each position?

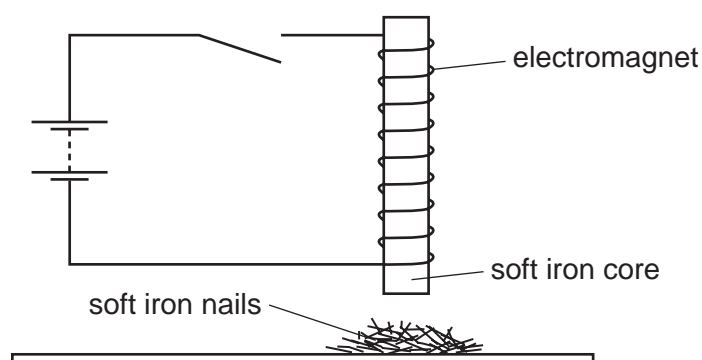
	near end X	near end Y
A	they attract	they attract
B	they attract	they repel
C	they repel	they attract
D	they repel	they repel

- 32 The diagram shows an electric circuit with three meters, connected correctly.



What is the reading on meter 3?

- A** 0.0A **B** 0.4A **C** 2.0V **D** 2.4V
- 33 An electromagnet with a soft iron core is connected to battery through an open switch. The soft iron core lies just above some small soft iron nails.



The switch is now closed, left closed for a few seconds, and then opened.

What do the soft iron nails do as the switch is closed and what do they do as the switch is then opened?

	as switch is closed	as switch is opened
A	nails jump up	nails fall down
B	nails jump up	nails stay up
C	nails stay down	nails jump up
D	nails stay down	nails stay down

34 The diagram shows different ways of arranging identical resistors.

Which arrangement has the smallest resistance?

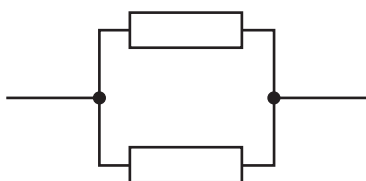
A



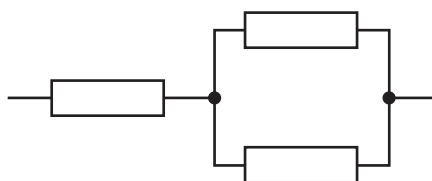
B



C



D



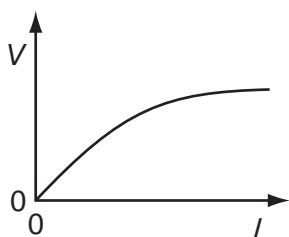
35 The current in an electric heater is 10 A. The heater is connected to the power supply using wire which is designed to carry a current of 5 A.

Why is this a hazard?

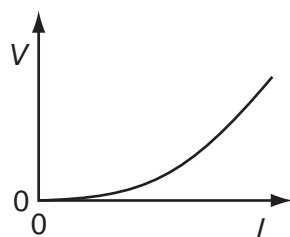
- A The heater could explode.
- B The wire could explode.
- C The heater could become too hot and cause a fire.
- D The wire could become too hot and cause a fire.

36 Which diagram is the V/I characteristic graph for a metallic conductor at constant temperature?

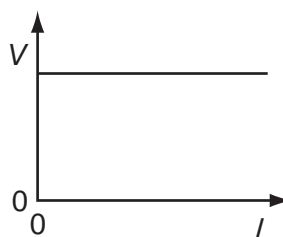
A



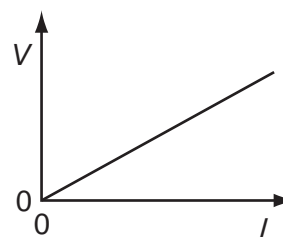
B



C

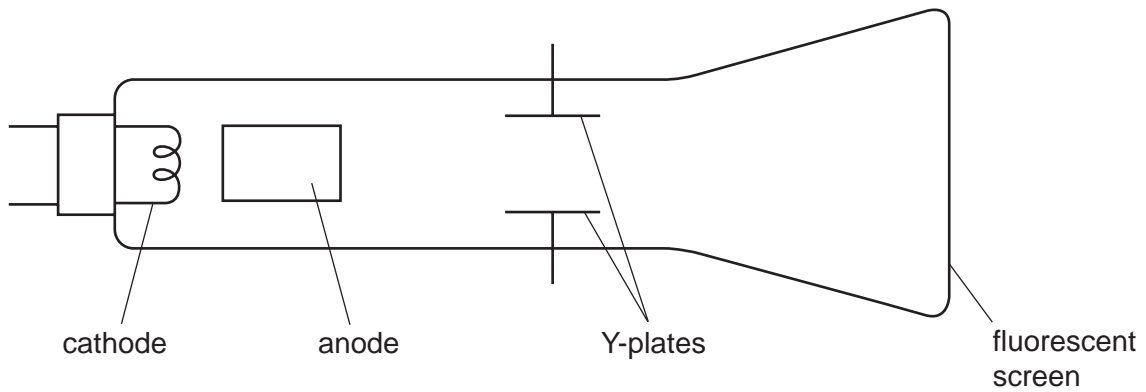


D



37 The diagram shows a cathode-ray oscilloscope.

Cathode rays are fast-moving electrons.



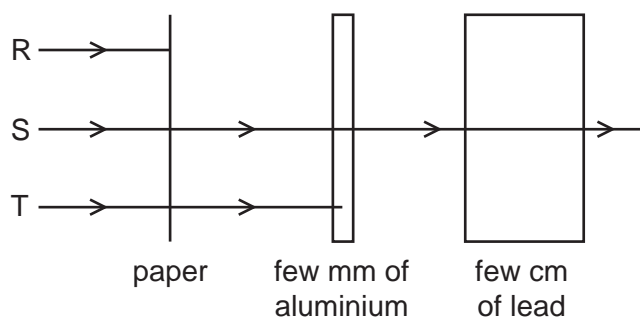
From where are the electrons released?

- A the anode
 - B the cathode
 - C the fluorescent screen
 - D the Y-plates
- 38 A lithium nucleus contains 3 protons and 4 neutrons.

What is its nuclide notation?

- A ${}^3_4\text{Li}$ B ${}^4_3\text{Li}$ C ${}^7_3\text{Li}$ D ${}^7_4\text{Li}$

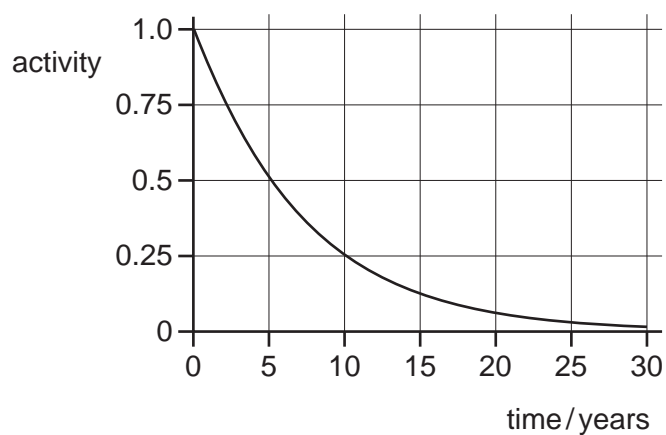
- 39 The diagram shows an experiment set up to study the penetrating properties of three types of radiation R, S and T from a radioactive source.



What types of radiation are R, S and T?

	R	S	T
A	alpha-particles	beta-particles	gamma-rays
B	alpha-particles	gamma-rays	beta-particles
C	beta-particles	alpha-particles	gamma-rays
D	gamma-rays	beta-particles	alpha-particles

- 40 The graph shows the radioactive decay curve of a substance.



What is the half-life of this substance?

- A** 0.5 years **B** 5 years **C** 15 years **D** 30 years

DATA SHEET
The Periodic Table of the Elements

		Group																								
		I	II	III	IV	V	VI	VII	VIII	IX	X															
		1 H Hydrogen 1																								
7	9	Li Lithium 3	Be Beryllium 4																							
23	24	Na Sodium 11	Mg Magnesium 12																							
39	40	K Potassium 19	Ca Calcium 20	45 Sc Scandium 21	48 Ti Titanium 22	51 V Vanadium 23	52 Cr Chromium 24	55 Mn Manganese 25	56 Fe Iron 26	59 Co Cobalt 27	59 Ni Nickel 28	64 Cu Copper 29	65 Zn Zinc 30	70 Ga Gallium 31	73 Ge Germanium 32	75 As Arsenic 33	79 Se Selenium 34	80 Br Bromine 35	84 Kr Krypton 36							
85	88	Rb Rubidium 37	Sr Strontium 38	89 Y Yttrium 39	91 Zr Zirconium 40	93 Nb Niobium 41	96 Mo Molybdenum 42	101 Ru Ruthenium 44	101 Rh Rhodium 45	103 Rh Rhodium 45	106 Pd Palladium 46	108 Ag Silver 47	112 Cd Cadmium 48	115 In Indium 49	119 Sn Tin 50	122 Sb Antimony 51	128 Te Tellurium 52	127 I Iodine 53	131 Xe Xenon 54							
133	137	Cs Caesium 55	Ba Barium 56	139 La Lanthanum 57	178 Hf Hafnium 72	181 Ta Tantalum 73	184 W Tungsten 74	190 Os Osmium 76	192 Ir Iridium 77	195 Pt Platinum 78	197 Au Gold 79	201 Hg Mercury 80	204 Tl Thallium 81	207 Pb Lead 82	209 Bi Bismuth 83	210 Po Polonium 84	210 At Astatine 85	210 Rn Radon 86								
	226	Fr Francium 87	Ra Radium 88	227 Ac Actinium 89																						
		*58-71 Lanthanoid series																								
		†90-103 Actinoid series																								
												140 Ce Cerium 58	141 Pr Praseodymium 59	144 Nd Neodymium 60	146 Pm Promethium 61	150 Sm Samarium 62	152 Eu Europium 63	157 Gd Gadolinium 64	159 Tb Terbium 65	162 Dy Dysprosium 66	165 Ho Holmium 67	167 Er Erbium 68	169 Tm Thulium 69	173 Yb Ytterbium 70	175 Lu Lutetium 71	
												232 Th Thorium 90	232 Pa Protactinium 91	238 U Uranium 92	238 Np Neptunium 93	244 Pu Plutonium 94	244 Am Americium 95	244 Cm Curium 96	247 Bk Berkelium 97	251 Cf Californium 98	252 Es Einsteinium 99	255 Fm Fermium 100	259 Md Mendelevium 101	261 No Nobelium 102	261 Lr Lawrencium 103	
														162 Dy Dysprosium 66	165 Ho Holmium 67	167 Er Erbium 68	169 Tm Thulium 69	173 Yb Ytterbium 70	175 Lu Lutetium 71	175 Lu Lutetium 71	175 Lu Lutetium 71	175 Lu Lutetium 71	175 Lu Lutetium 71	175 Lu Lutetium 71	175 Lu Lutetium 71	175 Lu Lutetium 71

a = relative atomic mass

X = atomic symbol

b = proton (atomic) number

Key

a	X
b	

The volume of one mole of any gas is 24 dm³ at room temperature and pressure (r.t.p.).